








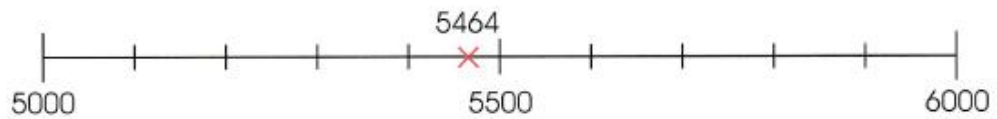
Grade 5

School-without-Walls Package 10 (31 May to 4 June 2021)

Homework_Day 1 (31 May 2021)

Subject	Click on the Youtube Links	Things to Note
English	Chapter 9 – Singular and Plural Pronouns Watch the video on singular and plural pronouns https://youtu.be/ZXJ0bv-772k	Complete pg 157 and 158 in your Writing and Grammar book
Mathematics	<div>LET'S LEARN</div> <p>Rounding numbers to the nearest thousand</p> <p>1.</p> <div> Nile River 6853 km</div> <div> Yellow River 5464 km</div> <div> Oka River 1500 km</div> <p>What is the length of each river rounded to the nearest 1000 km?</p> <p>(a) The Nile River is 6853 km long.</p> <div></div> <p>6853 is between 6000 and 7000. 6853 is nearer to 7000 than to 6000.</p> <p>We get 7000 when we round 6853 to the nearest thousand.</p> <p>$6853 \approx 7000$</p> <p>The Nile River is about 7000 m long.</p> <div></div>	

(b) The Yellow River is 5464 km long.



5464 is between 5000 and 6000.

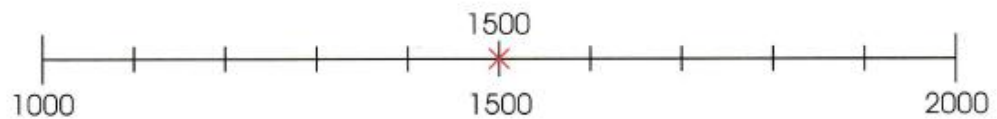
5464 is nearer to 5000 than to 6000.

5464 rounded to the nearest thousand is 5000.

$5464 \approx 5000$

The Yellow River is about 5000 km long.

(c) The Oka River is 1500 km long.



1500 is exactly halfway between 1000 and 2000.

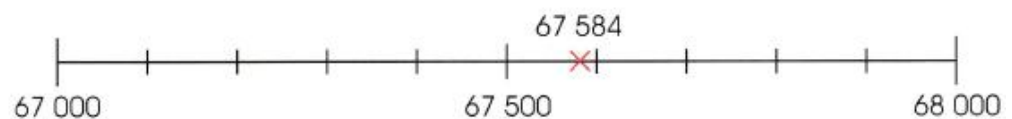
We round it up to 2000 to the nearest thousand.

$1500 \approx 2000$

The Oka River is about 2000 km long.

Copy Questions 2, 3 and 4 in your exercise book and complete the blanks.

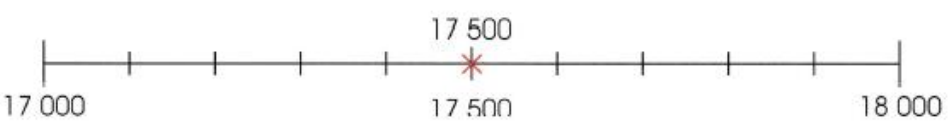
2. Round 67 584 to the nearest thousand.



67 584 is between 67 000 and 68 000.

67 584 is nearer to than to .




$67\,584 \approx$

	<p>3. Round 17 500 to the nearest thousand.</p>  <p>17 500 is exactly halfway between 17 000 and 18 000.</p> <p>17 500 \approx <input type="text"/></p> <p>4. Round each number to the nearest thousand.</p> <p>(a) 4875 \approx <input type="text"/> (b) 2150 \approx <input type="text"/></p> <p>(c) 3901 \approx <input type="text"/> (d) 38 562 \approx <input type="text"/></p> <p>(e) 89 132 \approx <input type="text"/> (f) 79 860 \approx <input type="text"/></p>	
Science	<p>Click Grade 5 Systems Textbook (Pdf) (Same as in SWW 9)</p> <p>Chapter 3 Digestive System Read page 18-21</p>	<p>Write the answers in your science notebook based on page 18-21</p> <ol style="list-style-type: none"> What do we need to grow and work properly? What is digestion? What is the journey of the food? <p>It starts from the mouth to the g_____, the s_____, the small i_____, the L_____ intestine and the a_____.</p>
Portuguese	<p>Uso da vírgula https://youtu.be/3zD5wNc-nDc?t=5</p>	<p>Escreve duas frases como uso da vírgula</p>

Homework_Day 2 (1 June 2021)

Subject	Click on the Youtube Links	Things to Note
English	Zoom Class	
Mathematics	Zoom Lesson – 2pm to 4pm Watch Growth Mindset 4/5 https://www.youtube.com/watch?v=HWr2gE5IIPc	Complete the questions in google form and submit. https://forms.gle/ZRSD3QPyHtTDDPxf8
Science	Read Page 20 -21	Base on Page 20-21 , write what does each organ do in your science notebook. a) The mouth b) The Gullet c) The Small Intestine
Portuguese	Sinais de pontuação https://youtu.be/5Vq2qdaswIM?t=8	Escreve cinco frases uso pontos - interrogação - exclamação - vígula - dois pontos : - travessão Quais são os sinais de pontuação?
PE	The Cup Game https://www.youtube.com/watch?v=5hBh0uPPICe	Learn the cup rhythm in the video. Challenge your parent. OR Do the cup rhythm together with your parent and send the video to your teacher.

Homework_Day 3 (2 June 2021)

Subject	Click on the Youtube Links	Things to Note
English	Chapter 9 - Subject and Object Pronouns Watch the video on singular and plural pronouns https://youtu.be/XUIL5mFH5y4	Complete pg 159 and 160 in your Writing and Grammar book
Mathematics	<div data-bbox="396 558 699 600">  LET'S LEARN </div> <div data-bbox="412 632 553 663"> Estimation </div> <div data-bbox="412 684 1154 814"> <p>1. 5213 adults and 785 children attended a carnival. Find the total number of people at the carnival. Estimate to check if your answer is reasonable.</p> </div> <div data-bbox="678 835 922 867"> $5213 + 785 = 5998$ </div> <div data-bbox="488 888 613 919"> Method 1 </div> <div data-bbox="412 999 570 1167">  </div> <div data-bbox="711 961 1268 1136"> <div data-bbox="878 961 1019 993">$5213 \approx 5000$</div> <div data-bbox="889 1003 1008 1035">$785 \approx 800$</div> <div data-bbox="808 1045 1089 1098"> $5213 + 785 \approx 5000 + 800$ $= 5800$ </div> <div data-bbox="716 1108 1268 1136">5998 is close to 5800, so the answer is reasonable. </div> </div> <div data-bbox="488 1234 618 1266"> Method 2 </div> <div data-bbox="488 1276 1243 1566"> <div data-bbox="781 1329 922 1360">$5213 \approx 5200$</div> <div data-bbox="792 1371 911 1402">$785 \approx 800$</div> <div data-bbox="716 1413 992 1465"> $5213 + 785 \approx 5200 + 800$ $= 6000$ </div> <div data-bbox="574 1476 1133 1507">5998 is close to 6000, so the answer is reasonable. </div> </div> <div data-bbox="1252 1472 1398 1640">  </div> <div data-bbox="488 1591 1024 1623"> <p>There were 5998 people at the carnival.</p> </div>	

2. Find the value of $4692 - 708$.
Estimate to check if your answer is reasonable.

$$4692 - 708 = 3984$$

Method 1

$$\begin{aligned} 4692 &\approx 5000 \\ 708 &\approx 1000 \\ 4692 - 708 &\approx 5000 - 1000 \\ &= 4000 \end{aligned}$$

3984 is close to 4000, so the answer is reasonable.



Method 2

$$\begin{aligned} 4692 &\approx 4700 \\ 708 &\approx 700 \\ 4692 - 708 &\approx 4700 - 700 \\ &= 4000 \end{aligned}$$

3984 is close to 4000, so the answer is reasonable.



Do Question 3 in your math exercise book

3. Estimate and find the value of each of the following.
- (a) $6427 + 568$
 - (b) $2649 - 1398$

Can you estimate in more than one way to check the reasonableness of your answers?



Review 1

1. Write in figures.

(a) Thirty-five thousand and sixty

(b) Eighty thousand, three hundred and eight

2. Write in words.

(a)

14 356	
--------	--

(b)

60 020	
--------	--

3. Fill in the blanks.

(a) In 67 534, the digit 7 stands for .

(b) In 46 021, the digit 0 is in the place.




(c) In 90 153, the digit is in the tens place.

(d) In 34 999, the value of the digit 9 in the hundreds place is .

Science	<p>Read Page 20-21</p> <p>Watch the video Digestive System</p> <p>https://youtu.be/bFcZvJp0bpU</p>	<p>Base on Page 20-21 , write what does each organ do in your science notebook.</p> <p>d) The large Intestine</p> <p>e) The Anus</p>
Portuguese	<p>Teste básico de português</p> <p>https://youtu.be/yBjKjnHK-pA</p>	<p>Escreve a resposta na sua caderno exercício português</p>

Homework_Day 4 (3 June 2021)

Subject	Click on the Youtube Links	Things to Note
English	Chapter 9 – Writing with Pronouns - Complete revision on subject and object pronouns – Pg 161 and 162 in your Writing and Grammar book	
Mathematics	Copy and complete Question 4, 5, 6, and 8 in the Math Exercise book. <p>4. Fill in the blanks.</p> <p>(a) $80\,000 + \boxed{2000} + 100 + 90 + 4 = 82\,194$</p> <p>(b) $60\,000 + 7000 + 900 + 8 = \boxed{}$</p> <p>(c) $50\,000 + 3000 + \boxed{} + 90 + 1 = 53\,591$</p> <p>(d) $\boxed{} + 8000 + 700 = 98\,700$</p> <p>5. Arrange the numbers in increasing order.</p> <p>23 073 23 800 24 009 21 347</p> <p>$\boxed{21\,347}, \boxed{}, \boxed{}, \boxed{}$</p> <p>6. Arrange the numbers in decreasing order.</p> <p>4078 40 807 4780 40 870</p> <p>$\boxed{40\,870}, \boxed{}, \boxed{}, \boxed{}$</p>	

	<p>8. Fill in the blanks.</p> <p>(a)</p>  <p>3016 is <input type="text"/> when rounded to the nearest ten.</p> <p>(b)</p>  <p>2053 is <input type="text"/> when rounded to the nearest hundred.</p> <p>(c)</p>  <p>12 499 is <input type="text"/> when rounded to the nearest thousand.</p>	
Science	Read G5 Science Where does food goes G2	Write the answers to the questions in your science notebook,
Portuguese	Usar os pronomes EU ou MIM https://youtu.be/hfDLU-PgDL8?t=2	1. Escreve 2 frases usando pronomes <u>Eu</u> ou <u>Mim</u> .
Music	Yancy & Little Praise Party - Praise the Lord Every Day https://www.youtube.com/watch?v=v5EC22vjUdg	Learn to Praise the Lord.

Homework_Day 5 (4 June 2021)

Subject	Click on the Youtube Links	Things to Note																								
English	<p>Readworks Comprehension</p> <ul style="list-style-type: none"> - Go to www.readworks.org - Click "Student Login" - Enter Class Code "H4Z2WY" - Click on your name - Enter Password "1234" <p>Complete comprehension assignment</p>																									
Mathematics	<p>Watch</p> <p>Growth Mindset 5/5 https://www.youtube.com/watch?v=BXyNOXSTaMg</p> <p>Copy and complete Question 9 in the Math Exercise book.</p> <p>9. The number of children who visited a zoo over a period of one week is shown below. Round the numbers to the nearest ten.</p> <table border="1"> <thead> <tr> <th>Days of the week</th><th>Number of children</th><th>Rounded to the nearest ten</th></tr> </thead> <tbody> <tr> <td>Monday</td><td>853</td><td></td></tr> <tr> <td>Tuesday</td><td>1007</td><td></td></tr> <tr> <td>Wednesday</td><td>452</td><td></td></tr> <tr> <td>Thursday</td><td>998</td><td></td></tr> <tr> <td>Friday</td><td>315</td><td></td></tr> <tr> <td>Saturday</td><td>1983</td><td></td></tr> <tr> <td>Sunday</td><td>2017</td><td></td></tr> </tbody> </table>	Days of the week	Number of children	Rounded to the nearest ten	Monday	853		Tuesday	1007		Wednesday	452		Thursday	998		Friday	315		Saturday	1983		Sunday	2017		
Days of the week	Number of children	Rounded to the nearest ten																								
Monday	853																									
Tuesday	1007																									
Wednesday	452																									
Thursday	998																									
Friday	315																									
Saturday	1983																									
Sunday	2017																									
Science	<p>Watch the video Digestive System https://youtu.be/9znLCDpjb1o</p>	<p>Base on the video, answer the following questions</p> <ol style="list-style-type: none"> 1. Which part of the digestive system does digestion starts? 2. Which parts of the digestive system absorb all the things needed by the body? 3. Which parts of the digestive system absorb water only? 4. Which parts of the digestive system store and release the things not needed by the body? 																								
Portuguese	<p>Sílaba tônica https://youtu.be/Kl86jF25PPE?t=18</p> <p>Grau comparativo adjetivo https://youtu.be/fe8aWOA5vNk?t=179</p>	<p>Escreve e círculo cinco palavras usando "sílabas tônicas"</p> <p>Escreve três frases usando grau comparativo adjetivo.</p>																								

