



Grade 4

School-without-Walls Package 16 (12 July to 16 July 2021)

Homework_Day 1 (12 July 2021)

Subject	Click on the Youtube Links	Things to Note
English	Vocabulary words english learn with picture - Unit 4 https://www.youtube.com/watch?v=Jm5MRlopuAo	Write down 5 vocabularies with the meaning and the examples that you have learnt from this video in your English Exercise Book.
Mathematics	Review on School without walls package 8 To solve those questions, go to package 8 to watch the video again. We will run through over zoom on Thursday. Dividing without regrouping	Dividing without regrouping Complete your questions by copying into your exercise book with example. Fill the in the blank. a. $21 \div \underline{\quad} = 7$ b. $\underline{\quad} \div 7 = 5$ c. $6 \div 3 = \underline{\quad}$ d. $20 \div 2 = \underline{\quad}$ e. $88 \div 4 = \underline{\quad}$ f. $53 \div 5 = \underline{\quad}$ g. $248 \div 2 = \underline{\quad}$ After watching the video and practicing please click on the link below to answer the questions. https://forms.gle/tc3LJ31Z8HVkVCep9
Science	The Circulatory system educational video for kids Watch the video. https://youtu.be/i5aXwiC3wWc	Read the description below and complete the missing word from the word bank. The circulatory system call _____, from that moment blood flows through our main _____ during this trip the blood delivery _____ and _____ trough cells to the _____. aorta vain oxygen nutrients capillary

		Copy your answer in your notebook.
Portuguese	<u>História sobre o Antoine de Saint-Exupéry</u>	Escreve as respostas na sua caderno exercício português.

Homework_Day 2 (13 July 2021)




Subject	Click on the Youtube Links	Things to Note
English	Possessive pronouns English grammar Grade 3 - 4 https://www.youtube.com/watch?v=jABDkzCeaCO	Write down all possessive pronouns with the examples of sentence based on the this video in your English Exercise Book.
Mathematics	<p>Review on School without walls package 8</p> <p>To solve those questions, go to package 8 to watch the video again.</p> <p>We will run through over zoom on Thursday.</p> <p>Dividing with regrouping</p>	<p>Dividing with regrouping Complete your questions by copying into your exercise book with example.</p> <p>Fill the in the blank.</p> <p>a. $68 \div 2 = \underline{\hspace{2cm}}$</p> <p>b. $\underline{\hspace{1cm}} \div 7 = \underline{\hspace{2cm}}$</p> <p>c. $65 \div 3 = \underline{\hspace{2cm}}$</p> <p>d. $200 \div 2 = \underline{\hspace{2cm}}$</p> <p>e. $880 \div 4 = \underline{\hspace{2cm}}$</p> <p>f. $58 \div 5 = \underline{\hspace{2cm}}$</p> <p>g. $488 \div 2 = \underline{\hspace{2cm}}$</p> <p>After watching the video and practicing please click on the link below to answer the questions. https://forms.gle/Fg8F6ArGokxGdZieA</p>
Science	Respiratory System learnt videos for kids. Watch the video https://youtu.be/mOKmjYwfDGU	Read the description below and complete the missing word from the word bank. When you breathing and taking oxygen, the air passing through _____ and when the air travels to the _____ also call _____. Through trachea branches out into two tuples call _____. When tiny hair call _____ moving the _____ inside, the mucus is a sticky substance that collects bacterial and other particles that may harms the lungs. The bronchi carry out the air to each lungs the right lung has _____ and the left lung has _____.

		<p>nostrils windpipe trachea bronchi cilia mucus 3 lops 2 lops</p> <p>Copy your answer in your notebook.</p>
Portuguese	<p>1. Plural das palavras terminadas em al, el, il, ol, ul https://youtu.be/9jk1asNskUY</p> <p>2. As palavras singulares e plurais em português</p>	<p>1. Escreve 5 palavras do plural terminadas al, el, il, ol, ul</p> <p>2. Worksheet – folha de trabalho Escreve as respostas na sua caderno exercício português.</p>

Homework_Day 3 (14 July 2021)

Subject	Click on the Youtube Links	Things to Note
English	Vocabulary words - Vocabulary words english learn with meaning- Unit 5 https://www.youtube.com/watch?v=79fJJQ05oIU	Write down 5 vocabularies with the meaning and the examples that you have learnt from this video in your English Exercise Book.
Mathematics	Review on School without walls package 8 To solve those questions, go to package 8 to watch the video again. We will run through over zoom on Thursday. More word problems	More word problems After watching the video and practicing please click on the link below to answer the questions. https://forms.gle/46UnkD8J6B4QWds8A
Science	Science Respiration System https://youtu.be/kacMYexDgHg	Watch the video link and answer the questions in the google forms below. https://forms.gle/EbaDk5h4t3L43sNu8
Portuguese	As ferramentas de jardim - garden tools https://youtu.be/WSft8XpwhY	Copia 10 palavras ferramentas na sua caderno exercício.

Homework_Day 4 (15 July 2021)

Subject	Click on the Youtube Links	Things to Note
English	Contractions in English Grade-3,4 Tutway https://www.youtube.com/watch?v=bgCyZNgAYO8	Write down all the sentences with its contractions based on the video in your English Exercise book.
Mathematics	<p>Zoom meeting</p> <p>SPMS (TL) is inviting you to a scheduled Zoom meeting.</p> <p>Topic: SPMS Grade 4 (2021) Time: 3 June 2021, 11am to 1pm</p> <p>Meeting ID: 818 1268 9746 Passcode: 2021G4</p> <p>Review on School without walls package 6</p> <p>To solve those question, go to package 6 to watch the video again.</p> <p>We will run through over zoom on Thursday.</p>	<p>Quotient and remainder</p> <p>Complete your questions by copying into your exercise book with example. Do it within 30 minutes</p> <ol style="list-style-type: none"> Find the quotient and remainder. Show the working <ol style="list-style-type: none"> $66 \div 7 = \underline{\hspace{2cm}}$ $58 \div 9 = \underline{\hspace{2cm}}$ $26 \div 4 = \underline{\hspace{2cm}}$ Nora puts 39 apples into 4 baskets. <div style="text-align: center;">  </div> <p>$\underline{\hspace{2cm}} \div \underline{\hspace{2cm}} = \underline{\hspace{2cm}}$</p> <p>There are $\underline{\hspace{2cm}}$ apples in each basket.</p> <p>$\underline{\hspace{2cm}}$ apples left.</p> 67 children are going for a school trip by minivan. Each minivan can seat 8 children. <div style="text-align: center;">  </div> <p>$\underline{\hspace{2cm}} \div \underline{\hspace{2cm}} = \underline{\hspace{2cm}} \text{ R } \underline{\hspace{2cm}}$</p> <p>The smallest number of minivan needed to seat the 67 children is $\underline{\hspace{2cm}}$</p> <div style="text-align: center;">  </div> Ahmad has \$46. He wants to buy some chocolate bars, <p>$\underline{\hspace{2cm}} \div \underline{\hspace{2cm}} = \underline{\hspace{2cm}} \text{ R } \underline{\hspace{2cm}}$</p> <p>The greatest number of chocolate bar Ahmad can buy is $\underline{\hspace{2cm}}$.</p> 13 custard tarts were put equally on 4 plates. <p>$13 \div 4 = \underline{\hspace{2cm}} \text{ R } \underline{\hspace{2cm}}$</p>

Science	Zoom teaching on respiration system	Copy the questions in power point slide, and answer the questions in Your notebook.
Portuguese	Completa o diálogo	Escreve as respostas na sua caderno exercício português.

Homework_Day 5 (16 July 2021)

Subject	Click on the Youtube Links	Things to Note
English	The Lighthouse Let's Discover English Course Book Grade 4 Periwinkle https://www.youtube.com/watch?v=6CjHxF9M0MY	Write down 15 new vocabularies that you have learnt from this video in your English Exercise Book.
Mathematics	Review on School without walls package 6 To solve those questions, go to package 6 to watch the video again. We will run through over zoom on Thursday. Multiplications without regrouping	Multiplications without regrouping Complete your questions by copying into your exercise book with example. Do it within 20 minutes Find the product of following. Show your working clearly. a) 101 and 7 b) 204 and 2 c) 400 and 8 d) 634 and 2 e) 222 and 4
Science	How do your lung work Watch the video link https://youtu.be/3oYFCQvC-0Q	Answer the questions in the google forms below. https://forms.gle/G9xk7SEXEFQ6ALRE6
Portuguese	Mal ou Mau https://youtu.be/0yVtBRM5emA	Copia 6 frases que usando palavras Mal e Mau, que você vê neste video.